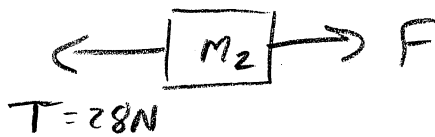


①



$$F - T = m_2 a$$

$$\begin{aligned} F &= m_2 a + T \\ &= 17(1.12) + 28 \\ &= 47.0 \text{ N} \end{aligned}$$



$$T = m_1 a$$

$$a = \frac{T}{m_1} = \frac{28 \text{ N}}{25 \text{ kg}}$$

$$a = 1.12 \text{ m/s}^2$$


②



$$T = m_1 a$$

$$= 20(1.71)$$

$$= 34.1 \text{ N}$$

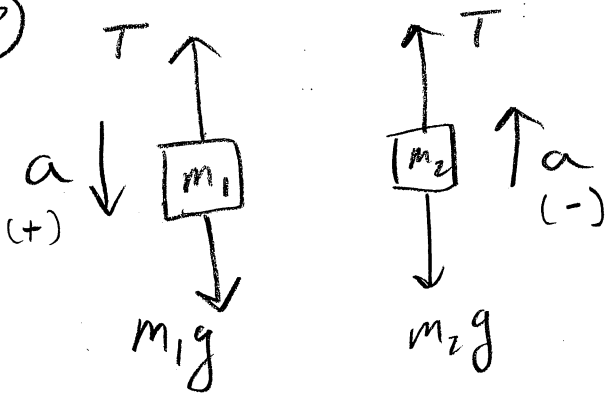


$$F = (m_1 + m_2) a$$

$$a = \frac{F}{m_1 + m_2} = \frac{58}{20 + 14}$$

$$a = 1.71 \text{ m/s}^2$$

③



$$-T + m_1 g = m_1 a$$

$$-T + m_2 g = -m_2 a$$

$$\frac{-T + m_1 g}{m_1} = \frac{-T + m_2 g}{-m_2}$$


$$T m_2 - m_1 m_2 g = -T m_1 + m_1 m_2 g$$

$$T m_1 + T m_2 = 2 m_1 m_2 g$$

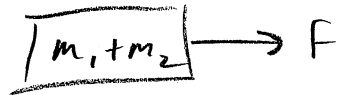
$$T = \frac{2 m_1 m_2 g}{m_1 + m_2} = \frac{2(16)(5)(10)}{16 + 5}$$

$$T = 76.2 \text{ N} \quad (74.7) \text{ for } g = 9.8$$

④

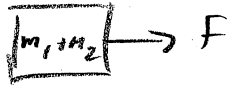


$$\begin{aligned} T &= m_1 a \\ &= 21(1.18) \\ &= \underline{24.8 \text{ N}} \end{aligned}$$

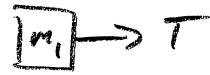


$$\begin{aligned} F &= (m_1 + m_2) a \\ a &= \frac{F}{(m_1 + m_2)} = \frac{39}{21 + 12} \\ a &= 1.18 \text{ m/s}^2 \end{aligned}$$

⑤

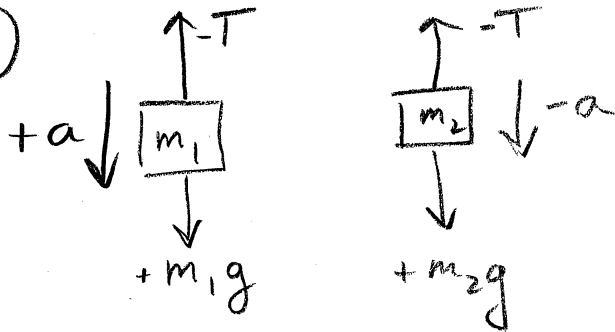


$$\begin{aligned} F &= (m_1 + m_2) a \\ F &= (26 + 22) 1.13 \\ &= \underline{54.2 \text{ N}} \end{aligned}$$



$$\begin{aligned} T &= m_1 a \\ a &= \frac{T}{m_1} = \frac{29.3}{26} = 1.13 \text{ m/s}^2 \end{aligned}$$

⑥



$$\begin{aligned} -T + m_1 g &= m_1 a \\ -T + m_2 g &= -m_2 a \\ T &= m_1 g - m_1 a \\ T &= m_2 g + m_2 a \end{aligned}$$

$$\begin{aligned} m_1 g - m_1 a &= m_2 g + m_2 a \\ m_1 g - m_2 g &= m_1 a + m_2 a \\ (m_1 - m_2) g &= (m_1 + m_2) a \end{aligned}$$

$$a = \frac{(m_1 - m_2) g}{m_1 + m_2}$$

if $m_1 = m_2$ then

$$\underline{a = 0}$$

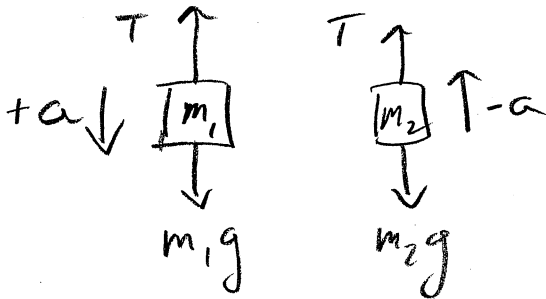
7) down is positive for 1

$$d = 6.3 \text{ m}$$

$$v = 0.97 \text{ m/s}$$

$$a = \underline{\hspace{2cm}}$$

$$t = ?$$



$$d = v_i t + \frac{1}{2} a t^2$$
$$6.3 = 0.97 t + \frac{1}{2} (2) t^2$$

$$t^2 + 0.97 t - 6.3 = 0$$

$$t = \frac{-0.97 \pm \sqrt{(0.97)^2 - 4(1)(-6.3)}}{2(1)} = \frac{(27 - 18) / 10}{(27 + 18)}$$

$$t = \underline{2.1 \text{ s}}$$

$$-T + m_1 g = m_1 a$$

$$-T + m_2 g = -m_2 a$$

$$T = m_1 g - m_1 a$$

$$T = m_2 g + m_2 a$$

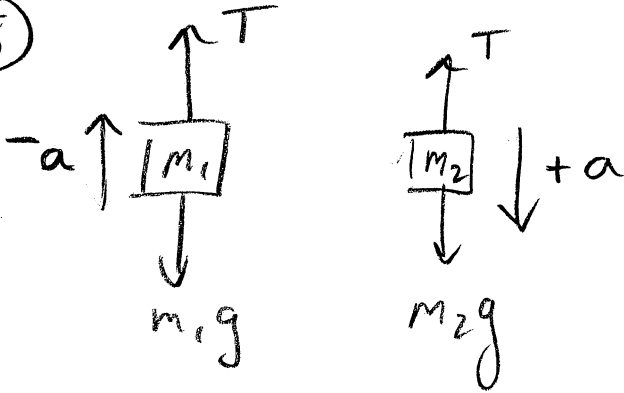
$$m_1 g - m_1 a = m_2 g + m_2 a$$

$$(m_1 - m_2) g = (m_1 + m_2) a$$

$$a = \frac{(m_1 - m_2) g}{m_1 + m_2}$$

$$a = 2 \text{ m/s}^2 \quad (\text{down})$$

⑧



$$-T + m_1g = -m_1a$$

$$-T + m_2g = m_2a$$

$$\frac{-T + m_1g}{-m_1} = \frac{-T + m_2g}{m_2}$$

$$-Tm_2 + m_1m_2g = Tm_1 - m_1m_2g$$

$$T(m_1 + m_2) = -2m_1m_2g$$

$$T = \frac{-2m_1m_2g}{m_1 + m_2}$$

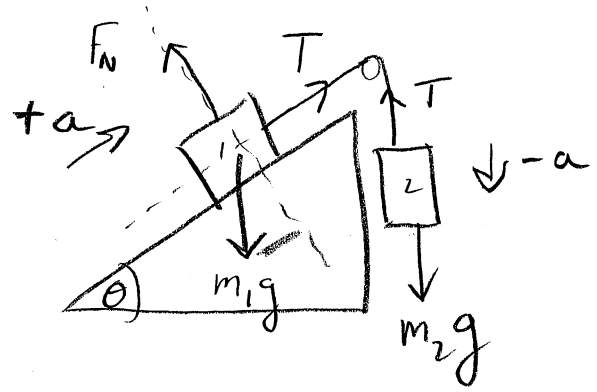
$$= \frac{-2(13)(23)10}{13 + 23}$$

$$T = -166 \text{ N}$$

(negative is direction as defined)

$$\underline{T = 166 \text{ N} \quad (163 \text{ N}) \quad g = 9.8}$$

9



Block 2

$$T - m_2g = -m_2a \quad T = m_2g - m_2a$$

Block 1

$$T - m_1g \sin \theta = m_1a \quad T = m_1g \sin \theta + m_1a$$

$$m_2g - m_2a = m_1g \sin \theta + m_1a$$

$$m_1 = m_2 - 5$$

$$m_2g - m_2a = (m_2 - 5)g \sin \theta + (m_2 - 5)a$$

$$m_2g - m_2a = m_2g \sin \theta - 5g \sin \theta + m_2a - 5a$$

$$m_2g - m_2a - m_2g \sin \theta - m_2a = -5g \sin \theta - 5a$$

$$m_2 = \frac{-5g \sin \theta - 5a}{g - g \sin \theta - 2a} = \frac{-5(10) \sin 27 - 5(5.91)}{10 - 10 \sin 27 - 2(5.91)} = \frac{-52.249}{-6.3399}$$

$m_2 = 8.2 \text{ kg}$ (8.0 kg) $g = 9.8$

10

$$v_i = 0$$

$$v_f = 6.6 \text{ m/s}$$

$$a = \text{---}$$

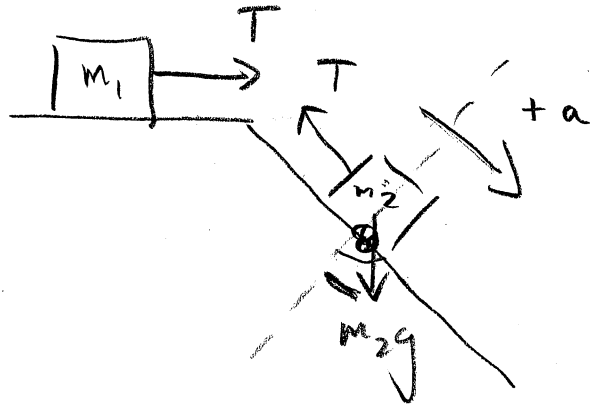
$$t = ?$$

$$v_f = v_i + a t$$

$$t = \frac{v_f}{a}$$

$$= \frac{6.6}{3.3}$$

$$t = 2 \text{ s}$$



Block 1

$$T = m_1 a$$

Block 2

$$-T + m_2 g \sin \theta = m_2 a$$

$$T = m_2 g \sin \theta - m_2 a$$

$$m_1 a = m_2 g \sin \theta - m_2 a$$

$$(m_1 + m_2) a = m_2 g \sin \theta$$

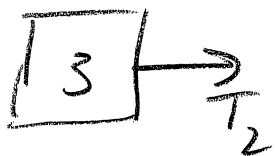
$$a = \frac{m_2 g \sin \theta}{m_1 + m_2}$$

$$= \frac{36(10) \sin 39}{(33 + 36)}$$

$$(33 + 36)$$

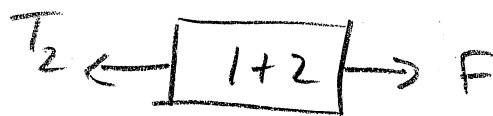
$$= 3.3 \text{ m/s}^2 \quad (3.2) g = 9.8$$

11



$$T_2 = m_3 a$$

$$\frac{T_2}{m_3} = a$$



$$F - T_2 = (m_1 + m_2) a$$

$$\frac{F - T_2}{m_1 + m_2} = a$$

$$\frac{T_2}{m_3} = \frac{F - T_2}{m_1 + m_2}$$


$$T_2 m_1 + T_2 m_2 = F m_3 - T_2 m_3$$

$$T_2 (m_1 + m_2 + m_3) = F m_3$$

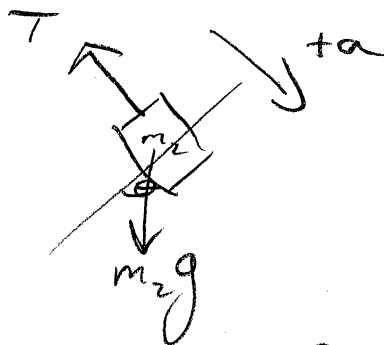
$$T_2 = \frac{F m_3}{(m_1 + m_2 + m_3)}$$
$$= \frac{130(11)}{(20 + 20 + 11)}$$

$$\underline{T_2 = 28 \text{ N}}$$

12



$$T = m_1 a$$



$$-T + m_2 g \sin \theta = m_2 a$$

$$T = m_2 g \sin \theta - m_2 a$$

$$m_1 a = m_2 g \sin \theta - m_2 a$$

$$a(m_1 + m_2) = m_2 g \sin \theta$$

$$a = \frac{m_2 g \sin \theta}{m_1 + m_2} = \frac{44(10) \sin 42}{(39 + 44)}$$

$$a = 3.5 \text{ m/s}^2$$


13

$$v_i = 0$$


$$v_f = 1.77 \text{ m/s}$$

$$a = \text{---}$$

$$t = ?$$



$$T = m_1 a$$



$$-T + m_2 g \sin \theta = m_2 a$$

$$T = m_2 g \sin \theta - m_2 a$$

$$a = \frac{m_2 g \sin \theta}{m_1 + m_2} = \frac{50(10) \sin 14}{(48 + 50)}$$

$$a = 1.23 \text{ m/s}^2$$

$$v_f = v_i + at$$

$$t = \frac{v_f}{a}$$

$$= \frac{1.77}{1.23}$$

$$t = 1.45$$

14

$$v_i = 0$$

$$v_f = 4.81 \text{ m/s}$$

$$a = \underline{\hspace{2cm}}$$

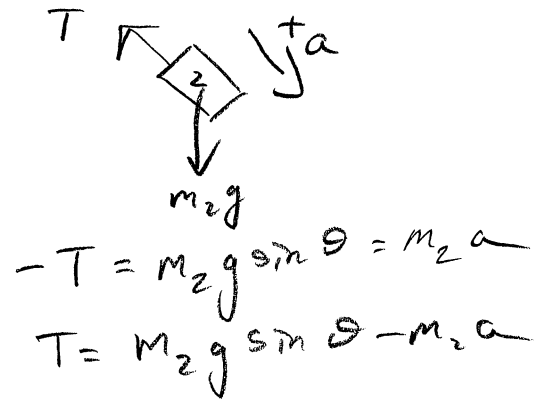
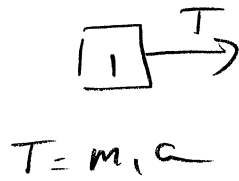
$$t = ?$$

$$v_f = v_i + at$$

$$t = \frac{v_f}{a}$$

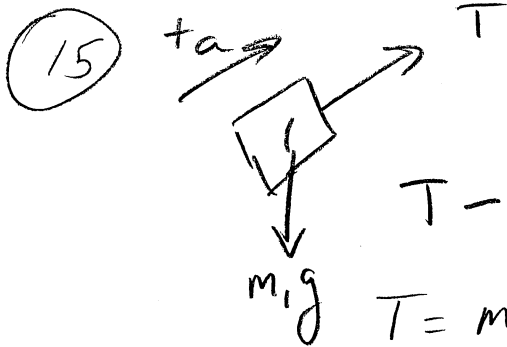
$$= \frac{4.81}{1.82}$$

$$t = 2.65$$



$$a = \frac{m_2 g \sin \theta}{(m_1 + m_2)} = \frac{38(10) \sin 19}{(30 + 38)}$$

$$a = 1.82 \text{ m/s}^2$$



$$T - m_1 g \sin \theta = m_1 a$$

$$T = m_1 g \sin \theta + m_1 a$$

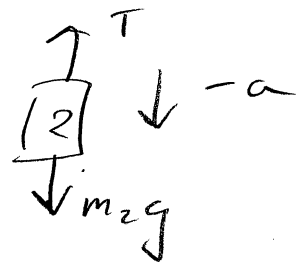
$$m_1 g \sin \theta + m_1 a = m_2 g - m_2 a$$

$$a(m_1 + m_2) = m_2 g - m_1 g \sin \theta$$

$$a = \frac{m_2 g - m_1 g \sin \theta}{m_1 + m_2}$$

$$= \frac{12(10) - 7(10) \sin 45}{(7 + 12)}$$

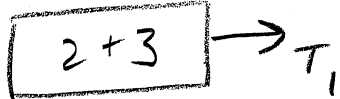
$$a = 3.7 \text{ m/s}^2$$



$$T - m_2 g = -m_2 a$$

$$T = m_2 g - m_2 a$$

(16)



$$T_1 = (m_2 + m_3) a$$

$$= (29 + 17) 2.05$$

$$\underline{T_1 = 94.3 \text{ N}}$$

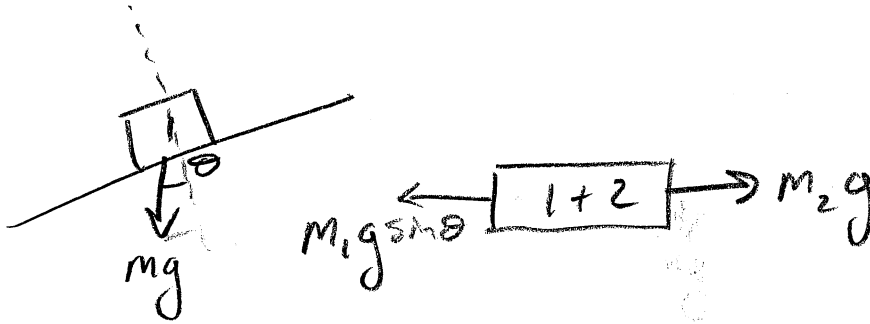


$$F = (m_1 + m_2 + m_3) a$$

$$a = \frac{F}{m_1 + m_2 + m_3}$$

$$a = \frac{174}{29 + 29 + 17} = 2.05$$

(17)



$$\Sigma F = ma$$

$$-m_1 g \sin \theta + m_2 g = (m_1 + m_2) a$$

$$a = \frac{-m_1 g \sin \theta + m_2 g}{m_1 + m_2}$$

$$= \frac{-(12.45) 10 \sin 14 + 15(10)}{(12.45 + 15)} = 4.37 \text{ m/s}^2$$

down is positive.

$$d = 0.29 \text{ m}$$

$$a = 4.37 \text{ m/s}^2$$

$$v_i = 0$$

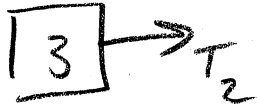
$$t = ?$$

$$d = v_i t + \frac{1}{2} a t^2$$

$$t = \frac{\sqrt{2d}}{\sqrt{a}} = \frac{\sqrt{2(.29)}}{4.37}$$

$$\underline{t = 0.36 \text{ s}}$$

18



$$T_2 = m_3 a$$

$$= 18(2.37)$$

$$T_2 = \underline{42.7 \text{ N}}$$

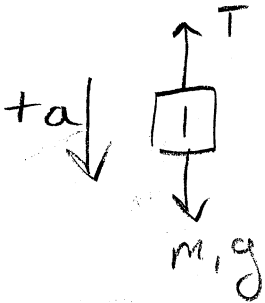


$$F = (m_1 + m_2 + m_3) a$$

$$a = \frac{F}{m_1 + m_2 + m_3}$$

$$= \frac{161}{27 + 23 + 18} = 2.37 \text{ m/s}^2$$

19

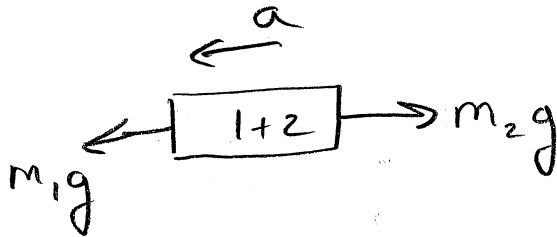


$$v_i = 0.36 \text{ m/s}$$

$$d = 11 \text{ m}$$

$$a = \underline{\hspace{2cm}}$$

$$t = ?$$



$$m_1 g - m_2 g = (m_1 + m_2) a$$

$$a = \frac{(m_1 - m_2) g}{m_1 + m_2}$$

$$= \frac{(29 - 10) 10}{(29 + 10)}$$

$$a = 4.87 \text{ m/s}^2$$

$$d = v_i t + \frac{1}{2} a t^2$$

$$11 = .36 t + \frac{1}{2} (4.87) t^2$$

$$2.435 t^2 + .36 t - 11 = 0$$

$$t = \frac{-0.36 \pm \sqrt{(.36)^2 - 4(2.435)(-11)}}{2(2.435)}$$

$$\underline{t = 2.1 \text{ s}}$$

(20)

$$\boxed{2+3} \rightarrow T_1$$

$$T_1 = (m_2 + m_3) a$$
$$= (29 + 13) 2.56$$

$$T_1 = \underline{107.5 \text{ N}}$$

$$\boxed{1+2+3} \rightarrow F$$

$$F = (m_1 + m_2 + m_3) a$$

$$a = \frac{F}{m_1 + m_2 + m_3}$$
$$= \frac{161}{21 + 29 + 13}$$

$$= 2.56 \text{ m/s}^2$$