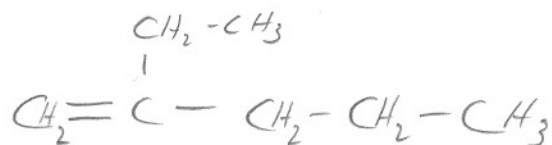


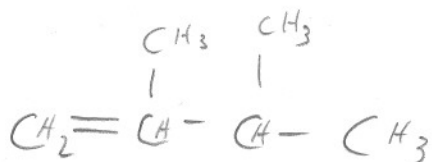
Naming Alkenes Worksheet #2

Draw the structural formula for each of the following:

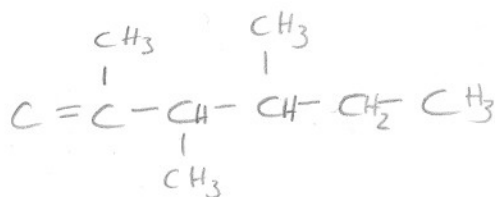
2-ethyl-1-pentene



2,3-dimethyl-1-butene



2,3,4 - trimethyl-1-hexene



2-ethyl-3,4-dimethyl-2-pentene

